

Verifica circonferenza - classe..... data.....

NOME.....COGNOME.....

**COLORA IN MODO OPPORTUNO**



cerchio



circonferenza



semicerchio



corona circolare



settore circolare




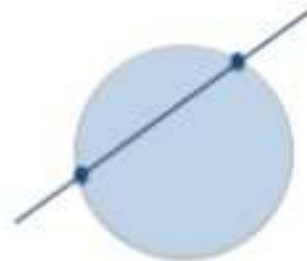
corda



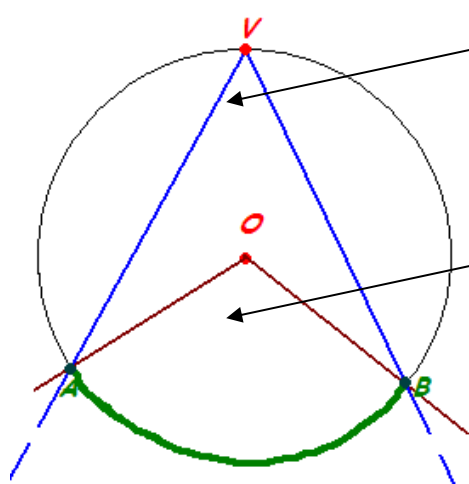
diametro

**COMPLETA CON I TERMINI OPPORTUNI**

retta tangente - retta secante - retta esterna - retta parallela - retta perpendicolare

**COMPLETA**

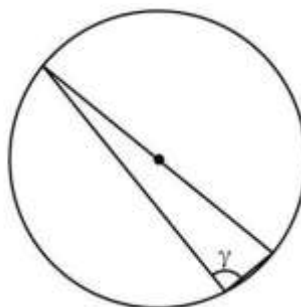
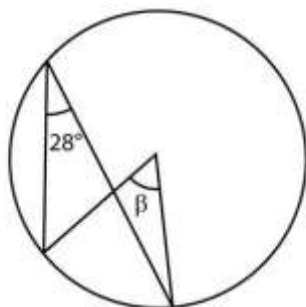
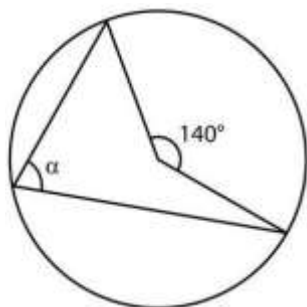


Angolo alla \_\_\_\_\_

Angolo al \_\_\_\_\_

Che tipo di relazione c'è tra i due angoli? \_\_\_\_\_  
 \_\_\_\_\_

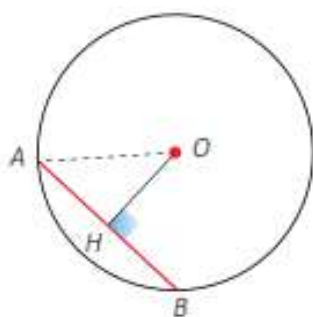
**RISOLVI**



$\alpha =$  \_\_\_\_\_

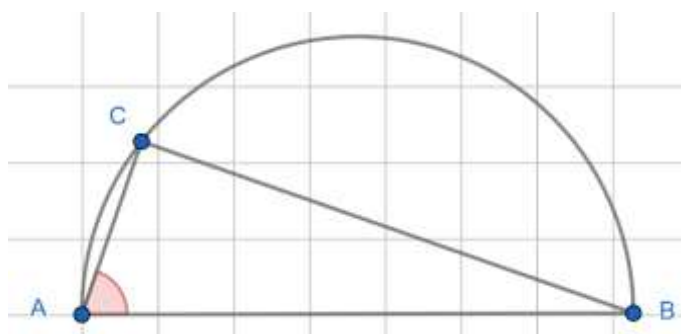
$\beta =$  \_\_\_\_\_

$\gamma =$  \_\_\_\_\_



$AO = 65 \text{ cm}$

$OH = 60 \text{ cm}$



$\alpha = 70^\circ$

$\beta =$  \_\_\_\_\_

$\gamma =$  \_\_\_\_\_