

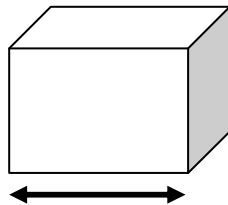
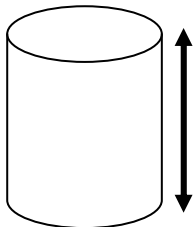


I solidi

Scrivi sotto ad ogni oggetto il nome del solido geometrico che ha la stessa forma



Sai che i solidi hanno tre dimensioni: lunghezza, larghezza, altezza. Scrivi qual è la dimensione che ti indica la freccia

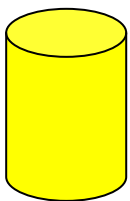


.....

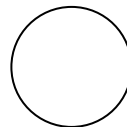
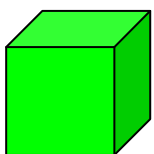
.....

.....

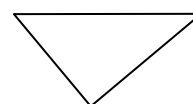

Collega ogni figura solida all'impronta della sua base e scrivi il nome delle figure piane.



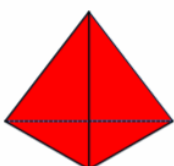
.....



.....



.....



.....